

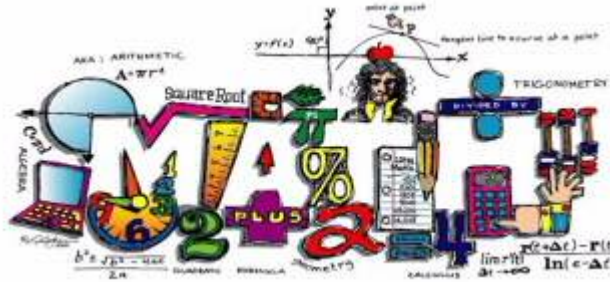
Name \_\_\_\_\_

Period \_\_\_\_\_

# 7<sup>th</sup> Grade Regular Incoming Assignment

\*\*\*\*\*

## Bak MSOA Summer Required Mathematics Assignment Directions



Each student shall print and complete ONE Math packet during the summer, based on the class in which he or she will be enrolled this August.

Please select the appropriate packet from the following:

6<sup>th</sup> grade (same for Regular and Advanced)

7<sup>th</sup> grade Regular

7<sup>th</sup> grade Advanced

8<sup>th</sup> grade Pre-Algebra

Algebra 1 Honors

Geometry Honors

No Calculators!

Show all appropriate work and circle your answers.

The Packet will not be collected on the first day of school.

This Assignment will be a portion of your first marking period Homework grade.

*Consider these helpful websites during the Summer and the School Year!*

*ixl.com, khanacademy.org, tenmarks.com, learnzillion.com*

**WE LOOK FORWARD TO SEEING YOU IN AUGUST. 😊**

# Addition and Subtraction of Fractions and Mixed Numbers

## Addition and Subtracting Fractions:

- 1) Rewrite the fractions with a common denominator
- 2) Add or subtract the numerators
- 3) Simplify the fraction

$$\begin{array}{r} \frac{1}{3} + \frac{1}{6} \\ \frac{1 \times 2}{3 \times 2} = \frac{2}{6} \\ + \frac{1 \times 1}{6 \times 1} = \frac{1}{6} \\ \hline \frac{3 \div 3}{6 \div 3} = \frac{1}{2} \end{array}$$

## Addition and Subtracting Mixed Numbers:

- 1) Rewrite the fractions with a common denominator
- 2) Rename, if necessary
- 3) Add or subtract the fractions. Add or subtract the whole numbers
- 4) Simplify if necessary

$$\begin{array}{r} 3\frac{1}{4} - 1\frac{1}{3} \\ 3\frac{1}{4} = 2\frac{3}{4} = 2\frac{9}{12} \\ - 1\frac{1}{3} = 1\frac{4}{12} \\ \hline 1\frac{5}{12} \end{array}$$

Find the sum. Write your answer in simplest form.

1.  $\frac{1}{4} + \frac{1}{2}$

2.  $\frac{2}{5} + \frac{1}{3}$

3.  $\frac{7}{15} + \frac{3}{10}$

4.  $\frac{11}{28} + \frac{4}{7}$

5.  $\frac{3}{4} + \frac{1}{12}$

6.  $\frac{9}{10} + \frac{13}{20}$

7.  $4\frac{15}{16} + 7\frac{3}{4}$

8.  $2\frac{16}{25} + 3\frac{18}{20}$

9.  $3\frac{2}{5} + 9\frac{1}{10}$

10.  $6\frac{1}{42} + 4\frac{5}{6}$

11.  $18\frac{7}{9} + 16$

12.  $4\frac{7}{8} + \frac{1}{3}$

---

Find the difference. Write your answer in simplest form.

13.  $\frac{7}{8} - \frac{1}{4}$

14.  $\frac{13}{15} - \frac{1}{3}$

15.  $\frac{7}{9} - \frac{2}{6}$

16.  $\frac{21}{24} - \frac{3}{8}$

17.  $\frac{3}{14} - \frac{1}{7}$

18.  $\frac{9}{10} - \frac{1}{2}$

19.  $9\frac{1}{6} - 4\frac{1}{12}$

20.  $12\frac{18}{25} - 8\frac{4}{5}$

21.  $5\frac{8}{9} - 3\frac{2}{3}$

22.  $8\frac{12}{16} - 7\frac{31}{32}$

23.  $10\frac{3}{4} - 6\frac{4}{5}$

24.  $13\frac{7}{8} - \frac{10}{12}$

# Multiplication and Division of Fractions and Mixed Numbers

## Multiplying Fractions and Mixed Numbers:

- 1) Convert mixed numbers to improper fractions
- 2) Cross simplify if possible
- 3) Multiply the 2 numerators and then multiply the 2 denominators
- 4) Simplify if necessary

$$2\frac{1}{4} \cdot \frac{1}{3}$$

$$2\frac{1}{4} = \frac{9}{4}$$

$$3 \cancel{9} / 4 \cdot \frac{1}{\cancel{3} 1} = \boxed{\frac{3}{4}}$$

## Dividing Fractions and Mixed Numbers:

- 1) Convert mixed numbers to improper fractions
- 2) "Same, Change, Flip" (keep first fraction the same, change division to multiplication, flip second fraction to its reciprocal)
- 3) Cross simplify if possible and then multiply
- 4) Simplify if necessary

$$\frac{3}{7} \div \frac{9}{10}$$

$$1 \cancel{3} / 7 \cdot \frac{10}{\cancel{9} 3} = \boxed{\frac{10}{21}}$$

Find the product. Write your answer in simplest form.

25.  $\frac{1}{8} \cdot \frac{1}{7}$

26.  $\frac{2}{9} \cdot \frac{12}{14}$

27.  $\frac{7}{12} \cdot \frac{8}{14}$

28.  $\frac{9}{24} \cdot \frac{16}{81}$

29.  $\frac{3}{14} \cdot \frac{21}{33}$

30.  $\frac{1}{2} \cdot \frac{9}{13}$

31.  $2\frac{1}{6} \cdot \frac{3}{5}$

32.  $8\frac{4}{5} \cdot 1\frac{5}{11}$

33.  $2\frac{1}{2} \cdot \frac{2}{5}$

34.  $9\frac{2}{3} \cdot 6$

35.  $13\frac{1}{3} \cdot 2\frac{1}{10}$

36.  $7 \cdot \frac{1}{3}$

---

Find the quotient. Write your answer in simplest form.

37.  $\frac{5}{6} \div \frac{1}{4}$

38.  $\frac{1}{2} \div \frac{1}{4}$

39.  $\frac{3}{4} \div \frac{9}{12}$

40.  $\frac{21}{35} \div \frac{7}{25}$

41.  $\frac{6}{7} \div 3$

42.  $\frac{2}{11} \div \frac{1}{33}$

43.  $1\frac{1}{4} \div 2\frac{1}{3}$

44.  $5\frac{3}{6} \div 3$

45.  $10\frac{1}{4} \div \frac{2}{5}$

46.  $3\frac{2}{3} \div 1\frac{1}{7}$

47.  $4\frac{3}{8} \div \frac{9}{10}$

48.  $8 \div \frac{3}{4}$

# Operations with Decimals

## Adding and Subtracting Decimals:

- 1) Line up decimal points
- 2) Bring the decimal down
- 3) Add or subtract as if numbers are whole numbers

$$5.2 + 10.03$$

$$\begin{array}{r} 5.2 \\ + 10.03 \\ \hline 15.23 \end{array}$$

## Multiplying Decimals:

- 1) Ignore the decimal points
- 2) Multiply as if numbers are whole numbers
- 3) Count the number of decimal places in the problem and move the decimal point in answer that many places

$$1.03 \times 2.8$$

$$\begin{array}{r} 1.03 \\ \times 2.8 \\ \hline 824 \\ 2060 \\ \hline 2.884 \end{array}$$

## Dividing Decimals:

- 1) If there is a decimal in the divisor, move it to the end of the number and move the decimal in the dividend the same number of places
- 2) Bring decimal point in dividend straight up
- 3) Divide. Add zeros to dividend and bring down if necessary.

$$6.4 \div 1.2$$

$$\begin{array}{r} 5.3 \\ 1.2 \overline{) 6.40} \\ \underline{60} \phantom{0} \\ 40 \\ \underline{36} \\ 4 \end{array}$$

**Find the sum or difference.**

49.  $6.2 + 3.4$

50.  $8.04 - 6.8$

51.  $12.4 + 0.899$

52.  $12.9 - 2.043$

53.  $163.29 + 13.987$

54.  $13 - 6.7$

55.  $3.91 + 1.93$

56.  $34.2 - 29.027$

---

**Find the product.**

57.  $9.2 \times 3.1$

58.  $(14.1)(2.7)$

59.  $91 \times 4.5$

60.  $(82.04)(1.2)$

61.  $(1.1)(6.78)$

62.  $45 \times 0.1$

63.  $0.010 \times 13.9$

64.  $(2.34)(5.6)$

---

**Find the quotient.**

65.  $2 \overline{)8.4}$

66.  $13 \overline{)1.56}$

67.  $2 \overline{)7.45}$

68.  $8 \overline{)9}$

69.  $3.4 \overline{)68}$

70.  $0.2 \overline{)9.4}$

71.  $0.15 \overline{)0.045}$

72.  $0.3 \overline{)4}$

# Geometry

**Area Formulas: (remember area = the space inside a figure)**

*Area of Rectangle = length  $\times$  width*

*Area of Triangle =  $\frac{1}{2}$  base  $\times$  height*

*Area of Circle =  $\pi \cdot \text{radius}^2$*

*Area of Parallelogram = base  $\times$  height*

**Perimeter: (remember perimeter = the distance around a figure)**

*Perimeter of any polygon: add up all the sides*

*Circumference of Circle =  $2 \cdot \pi \cdot \text{radius}$*

**Volume: (remember volume = the capacity of a 3D figure)**

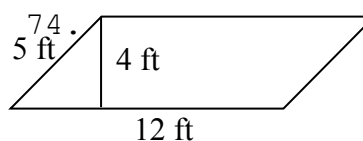

*Volume of Rectangular Prism = length  $\times$  width  $\times$  height*

*$\pi \cdot \text{diameter}$*

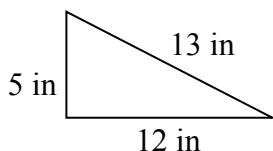


Find the area and perimeter (or circumference). Use 3.14 for pi:

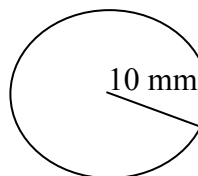
73.



75.

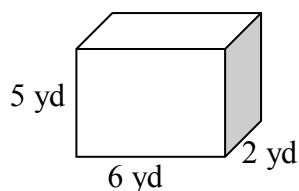


76.



Find the volume:

77.



Solve the word problem:

78. Danny is installing a fence around his rectangular yard. His yard is 20 feet long by 45 feet wide. If the fencing he picked out costs \$25 per foot, how much money will Danny spend on the fence?
79. Tameka wants to put a carpet in her rectangular bedroom. Her room is 22 feet long by 18 feet wide. How much carpeting will Tameka need?
80. Don wants to bring some sand home from his vacation at the beach. He has a box that is 3 inches wide, 4 inches long and 2 inches tall. How much sand can he fit in the box?

# Solving One-step Equations

## Addition Equations:

Subtract the number on the same side of the equal sign as the variable from each side of the equation

$$x + 3 = 9$$

$$\begin{array}{r} x + 3 = 9 \\ -3 \quad -3 \\ \hline x = 6 \end{array}$$

## Subtraction Equations:

Add the number on the same side of the equal sign as the variable to each side of the equation

$$14 = x - 7$$

$$\begin{array}{r} 14 = x - 7 \\ +7 \quad +7 \\ \hline 21 = x \end{array}$$

## Multiplication Equations:

Divide each side of the equation by the number on the same side of the equal sign as the variable

$$5m = 105$$

$$\begin{array}{r} 5m = 105 \\ \hline m = 21 \end{array}$$

## Division Equations:

Multiply each side of the equation by the number on the same side of the equal sign as the variable

$$\frac{y}{13} = 5$$

$$\begin{array}{r} 13 \times \frac{y}{13} = 5 \times 13 \\ \hline y = 65 \end{array}$$

Solve for the given variable:

81.  $x + 18 = 32$

82.  $18f = 720$

83.  $h - 56 = 57$

84.  $\frac{b}{6} = 12$

85.  $12 = r - 76$

86.  $33 + d = 65$

87.  $14m = 42$

88.  $10c = 5$

89.  $38 = 19j$

90.  $w + 65 = 100$

91.  $r - 7 = 9$

92.  $x \div 12 = 9$

93.  $14 + x = 18$

94.  $\frac{p}{22} = 7$

95.  $47 = x - 5$

96.  $k + 16 = 76$

97.  $2 = 6m$

98.  $t - 8 = 14$

99.  $\frac{h}{19} = 11$

100.  $47 = 18 + b$